

Psychology  
PAPER 2

Diagram Booklet

In the boxes below, write your name, centre number and candidate number.

Surname					
Other names					
Centre Number					
Candidate Number					

**INSTRUCTIONS**

There may be spare copies of some diagrams in case you need them.

**THIS DIAGRAM BOOKLET *MUST* BE RETURNED WITH THE  
QUESTION PAPER AT THE END OF THE EXAMINATION.**

## Contents

### Page

4	Question 1(d)
5	Question 2
6	Question 2(b)
7	Question 2(b) (Spare copy)
8	Question 3(d)
9	Question 4(c)
10	Question 25
11	Question 26

Question 1(d)

TABLE 1

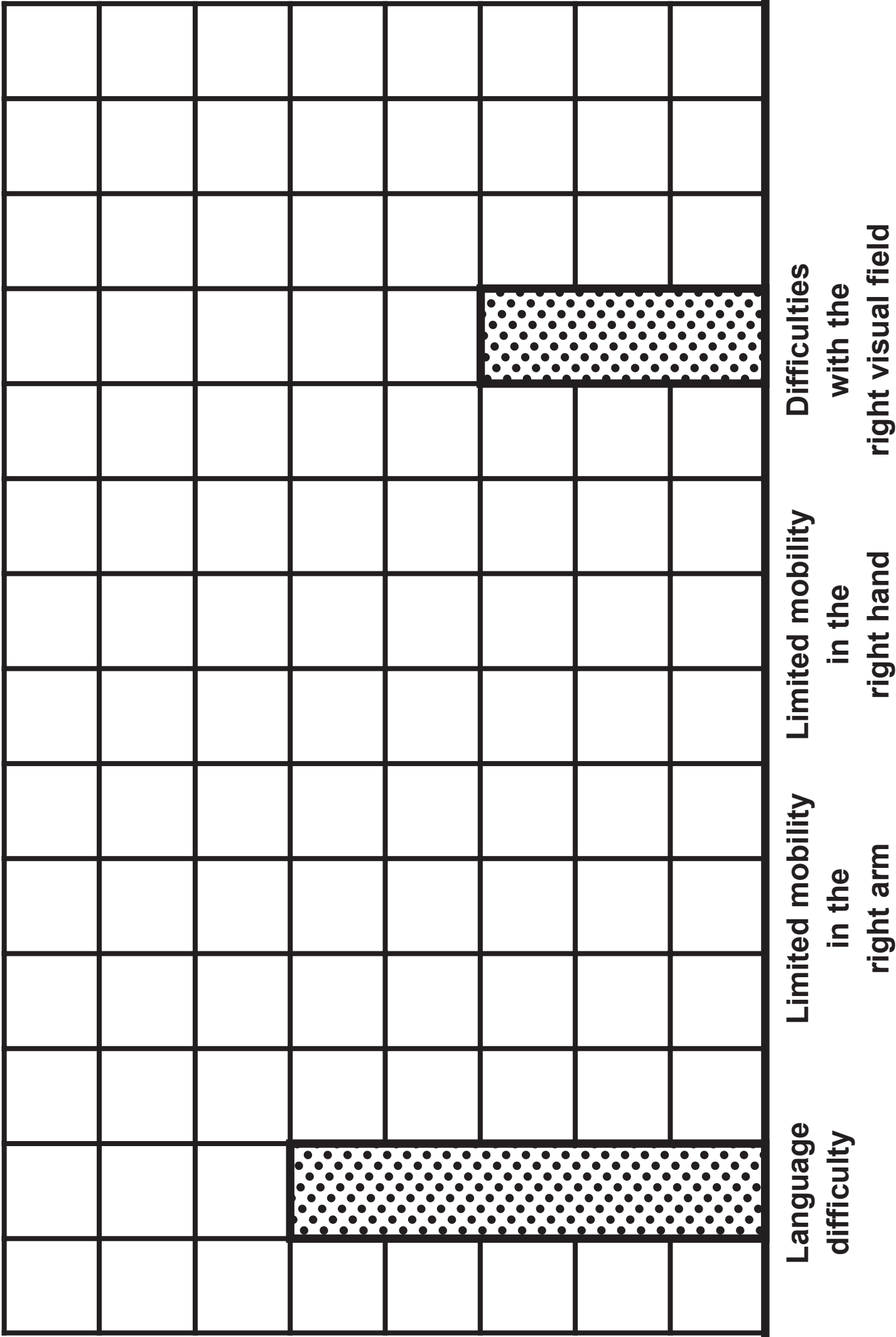
	Number of trigrams recalled correctly				
	Between 1 and 4 trigrams	Between 5 and 8 trigrams	Between 9 and 12 trigrams	Between 13 and 16 trigrams	Between 17 and 20 trigrams
Males	0	2	3	0	0
Females	1	5	8	1	0

Question 2

TABLE 2

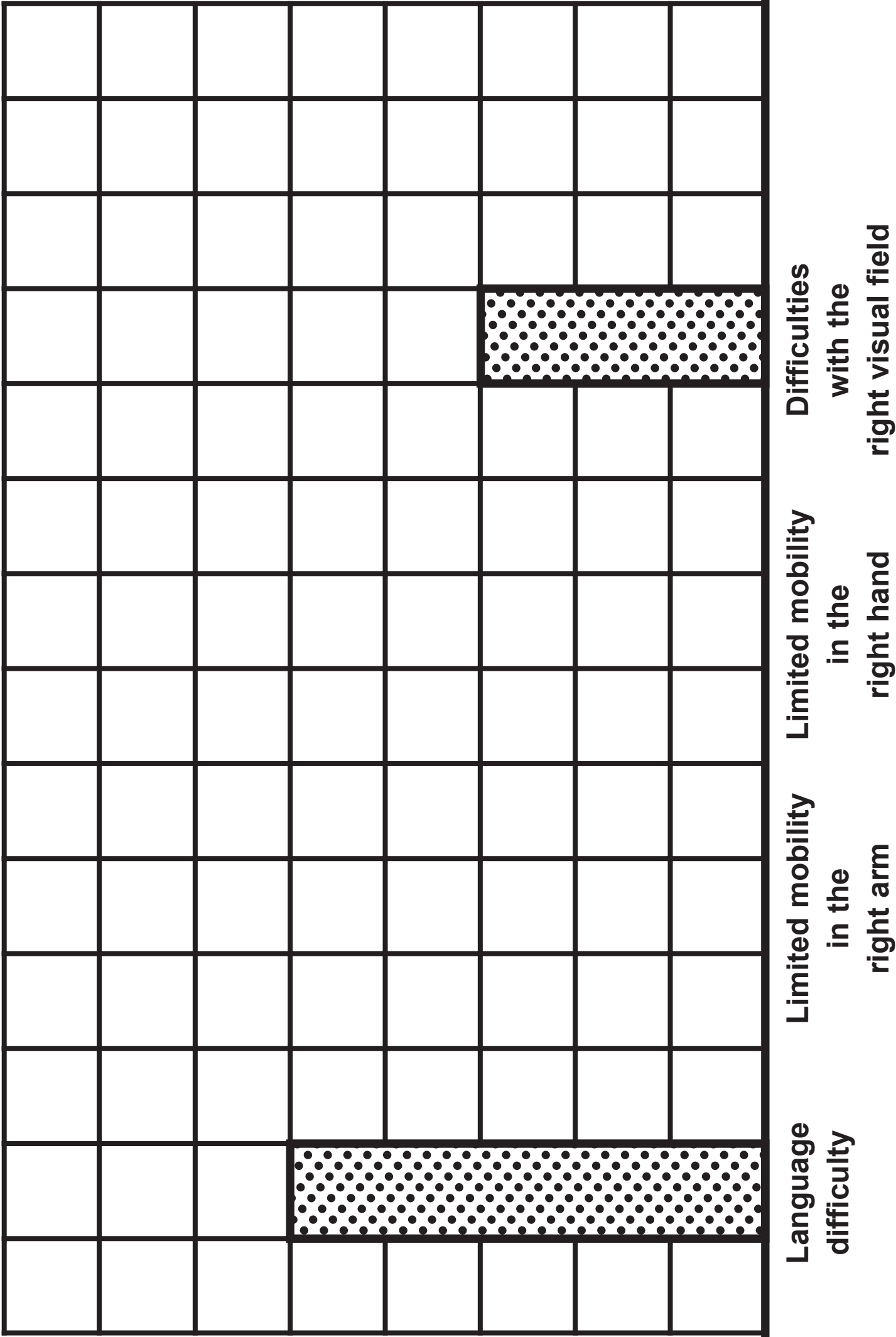
Patient	Language difficulty	Limited mobility in the right arm	Limited mobility in the right hand	Difficulties with the right visual field
A	Yes	No	No	Yes
B	Yes	Yes	No	Yes
C	Yes	Yes	No	No
D	Yes	Yes	Yes	Yes
E	Yes	Yes	Yes	No

A bar chart to show the number of patients reporting impacts from damage to the left hemisphere of the brain



Impact of damage to the left hemisphere

A bar chart to show the number of patients reporting impacts from damage to the left hemisphere of the brain



Impact of damage to the left hemisphere

Question 3(d)

TABLE 3

Participant	Number of hours per day using social media	Body image score (out of 10)
A	2	6
B	1	7
C	4	3
D	6	2
E	2	7
F	5	3
G	1	9
H	2	7
I	7	1




Question 4(c)

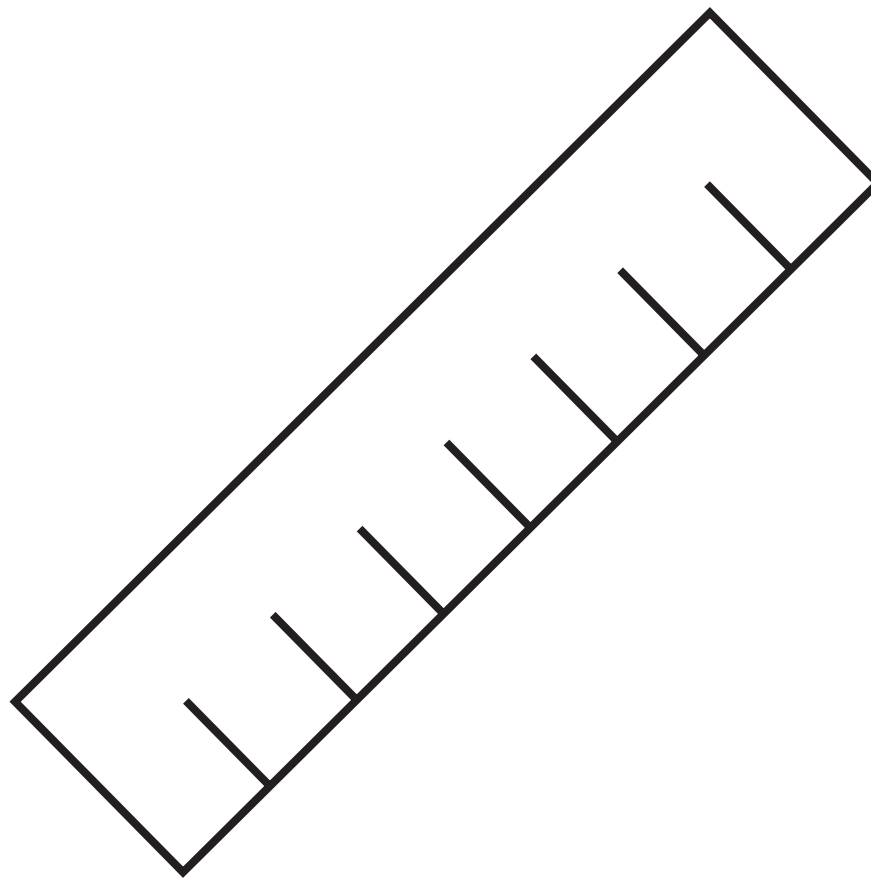
TABLE 4

Participant	Number of reported obedient acts (in a week)
A	15
B	14
C	18
D	16
E	18
F	14
G	13
H	19

## Question 25

FIGURE 1



**Question 26****FIGURE 2**

**Word read to Steven: Ruler**

**Word read to Thomas: Comb**